

Karnali Province Assistant 5th Level
(Administration/Account/Audit)
IQ Practice Set 2

1. If selling price is doubled, the profit triples. Find the profit percent.
A. $66\frac{2}{3}$ B. 100 C. $105\frac{1}{3}$ D. 120
2. A fruit seller had some apples. He sells 40% apples and still has 420 apples. Originally, he had:
A. 588 apples B. 600 apples C. 672 apples D. 700 apples
3. It was Sunday on Jan 1, 2006. What was the day of the week Jan 1, 2010?
A. Sunday B. Saturday C. Friday D. Wednesday
4. The average weight of 8 person's increases by 2.5 kg when a new person comes in place of one of them weighing 65 kg. What might be the weight of the new person?
A. 76kg B. 76.5 kg C. 85 kg D. Data Inadequate
5. A can do a piece of work in 4 hours; B and C together can do it in 3 hours, while A and C together can do it in 2 hours. How long will B alone take to do it?
A. 8 hr B. 10 hr C. 12 hr D. 24 hr
6. A sum of money is to be distributed among A, B, C, D in the proportion of 5 : 2 : 4 : 3. If C gets Rs. 1000 more than D, what is B's share?
A. 500 B. 1500 C. 2000 D. None of these
7. Complete the series.
5.2, 4.8, 4.4, 4, ?

Karnali Province Assistant 5th Level
(Administration/Account/Audit)

IQ Practice Set 2

A. 3 B. 3.3 C.3.5 D. 3.6

8. Arrange the words given below in a meaningful sequence.

1. Rainbow 2. Rain 3. Sun 4. Happy 5. Child

A. 4,2,3,5,1 B. 2,3,1,5,4 C. 4,5,1,2,3 D. 2,1,4,5,3

9. Which of the following diagrams indicates the best relation between Judge, Thieves and Criminals?



10. One morning Udaya and Vishal were talking to each other face to face at a crossing. If Vishal's shadow was exactly to the left of Udaya, which direction was Udaya facing?

A. East B. West C. North D. South

11. Six girls are sitting in a circle facing to the centre of the circle. They are P, Q, R, S, T and V. T is not between Q and S but some other one. P is next to the left of V. R is 4th to the right of P. Then, what is the position of T?

A. Just next to the right of Q B. Second to the left of P C. Between Q and R D. To the immediate right of V

12. SCD, TEF, UGH, _?

A. VUK B. IJK C. JIV D. VIJ

13. Which one does not belong to the group ?

63,84,91,98,65

Karnali Province Assistant 5th Level
(Administration/Account/Audit)

IQ Practice Set 2

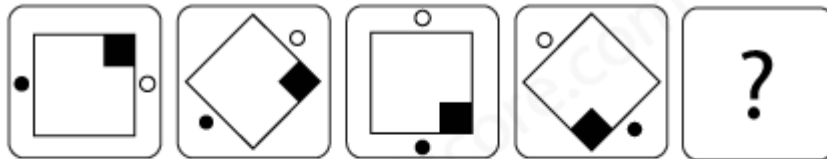
A.63

B. 84

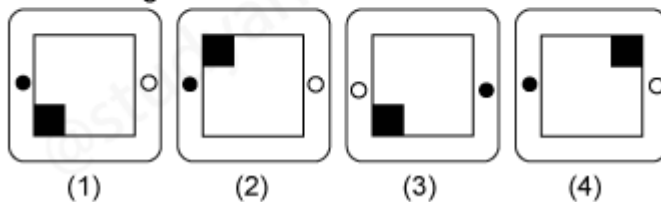
C. 98

D. 65

14. Complete the series



Answer figures:



A.4

B.3

C.2

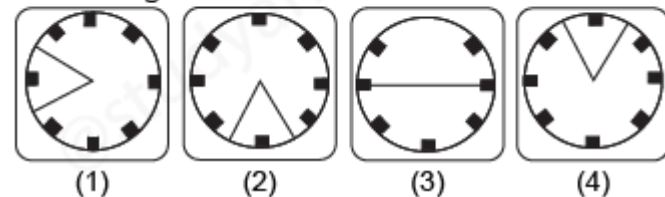
D.1

15. Find the water image of question figure from answer figure. The water is along XY.

Question figure:



Answer figures:



A.1

B.2

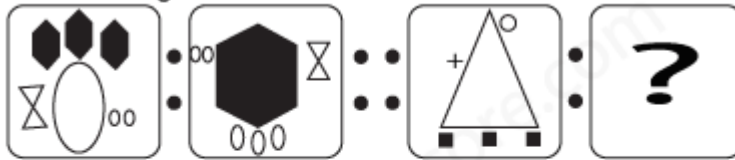
C.3

D.4

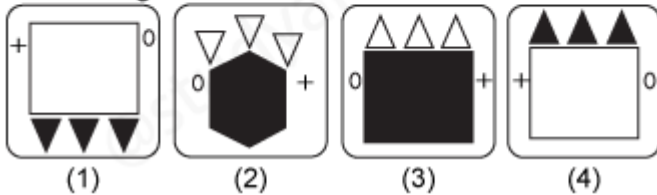
16. Replace the question mark of question figure from answer figure

Karnali Province Assistant 5th Level
(Administration/Account/Audit)
IQ Practice Set 2

Question figures:



Answer figures:



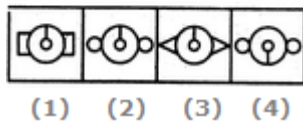
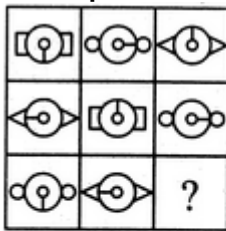
A.1

B.2

C.3

D.4

17. Complete the matrix from the given alternatives.



A.1

B.2

C.3

D.4

18. From the given answer figures, select the one in which the question figure embedded?

Karnali Province Assistant 5th Level
(Administration/Account/Audit)
IQ Practice Set 2

Question figure:



Answer figures:



(1)



(2)



(3)



(4)

A.1

B.2

C.3

D.4

19. Find the number of triangle.



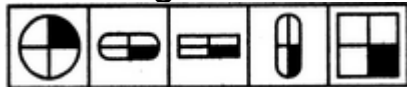
A.20

B.16

C.15

D.18

20. Which figure is different from the rest?



A

B

C

D

E

A.C

B. A

C. D

D. E